

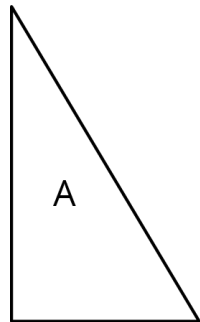
NAME _____

DATE _____

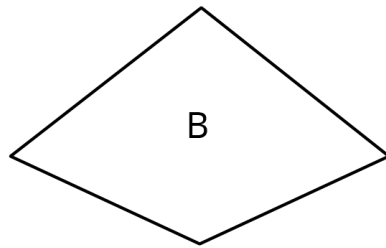
PERIOD _____

Unit 1, Lesson 3: Making Scaled Copies

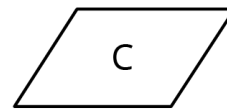
1. Here are 3 polygons.



Draw a scaled copy of Polygon A using a scale factor of 2.




Draw a scaled copy of Polygon B using a scale factor of $\frac{1}{2}$.



Draw a scaled copy of Polygon C using a scale factor of $\frac{3}{2}$.

2. Quadrilateral A has side lengths 6, 9, 9, and 12. Quadrilateral B is a scaled copy of Quadrilateral A, with its shortest side of length 2. What is the perimeter of Quadrilateral B?

3. Here is a polygon on a grid.



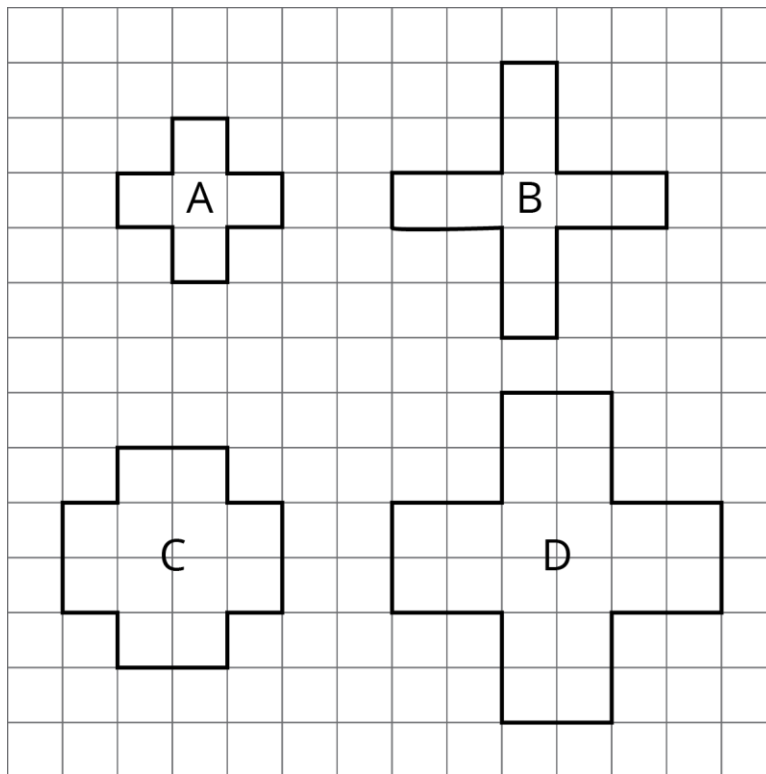
NAME _____

DATE _____

PERIOD _____

Draw a scaled copy of this polygon that has a perimeter of 30 units. What is the scale factor? Explain how you know.

4. Priya and Tyler are discussing the figures shown below. Priya thinks that B, C, and D are scaled copies of A. Tyler says B and D are scaled copies of A. Do you agree with Priya, or do you agree with Tyler? Explain your reasoning.



(from Unit 1, Lesson 1)